

# Time

## Worksheet 45

### What time do you usually...

Look!

What time do you get up in the morning?

I usually get up at 7 o'clock.

Ask two people. Write the times.

Name		
1 ...get up in the morning?		
2 ...have breakfast?		
3 ...leave home in the morning?		
4 ...start your English class?		
5 ...have lunch?		
6 ...have dinner?		
7 ...go to bed?		
8 ...get up at weekends?		

Now write some sentences about your partners and about you.

Examples: I usually get up at 7.30 on weekdays.  
 Sara has lunch at about 2 o'clock.  
 Solomon usually goes to bed at midnight.

.....

.....

.....

.....

.....


.....

.....

.....

.....

.....




# Time

## Worksheet 46

Look at the clocks. What's the time? Tell your partner.  
Write the letter.


What's the time?

It's two o'clock.



- 1 It's ten o'clock. ....
- 2 It's seven o'clock. ....
- 3 It's five o'clock. ....
- 4 It's three o'clock. ....

- 5 It's half past eleven. ....
- 6 It's half past four. ....
- 7 It's half past one. ....
- 8 It's half past six. ....



- 9 It's quarter past seven. ....
- 10 It's quarter past nine. ....
- 11 It's quarter past five. ....
- 12 It's quarter past twelve. ....

- 13 It's quarter to four. ....
- 14 It's quarter to eight. ....
- 15 It's quarter to eleven. ....
- 16 It's quarter to one. ....




What's the time? Speak and write.

.....

.....

.....

.....



# Time

## Worksheet 47

Look at the clocks. What's the time?

<b>1</b>	<b>2</b>	<b>3</b>	<b>4</b>
<b>5</b>	<b>6</b>	<b>7</b>	<b>8</b>
<b>9</b>	<b>10</b>	<b>11</b>	<b>12</b>

Now match the times. Check in the *Longman Photo Dictionary*.

It's quarter to eight. ....	It's twenty past seven. ....	It's five to eight. ....
It's quarter past seven. ....	It's five past seven. ....	It's ten to eight. ....
It's half past seven. ....	It's ten past seven. ....	It's twenty-five to eight. ....
It's seven o'clock. ....	It's twenty-five past seven. ....	It's twenty to eight. ....

Now practise with a partner.


Excuse me. What's the time, please?

It's half past eight.

Thanks.

Now write the times for these clocks.

	.....		.....		.....
	.....		.....		.....
	.....		.....		.....



# Time Worksheet 48

## Digital clocks

Can you count in fives? Practise with a partner.

5, 10, ..... , ..... , ..... , ..... , ..... , ..... , ..... , 60.

Look at the clocks. Can you say the times?

1		2		3		4	
5		6		7		8	
9		10		11		12	

Write the number of the clock.


- It's seven ten. ....
- It's seven fifteen. ....
- It's seven thirty-five. ....
- It's seven o'clock. ....
- It's seven oh five. ....
- It's seven twenty-five. ....
- It's seven forty. ....
- It's seven fifty-five. ....
- It's seven twenty. ....
- It's seven forty-five. ....
- It's seven thirty. ....
- It's seven fifty. ....

Now match the digital and analogue clocks. Check in the *Longman Photo Dictionary*.  
Write the number in the box.

1		2		3		4	
5		6		7		8	
9		10		11		12	

3.00		8.05	
6.45		5.20	
11.30		12.45	
9.10		2.55	
1.15		4.25	
7.50		10.35	

Look at the clocks. What's the time?

	It's quarter past eight.	It's eight fifteen.
